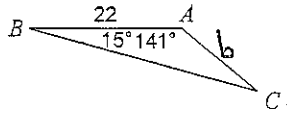
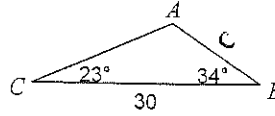


Find each measurement indicated. Round your answers to the nearest tenth.

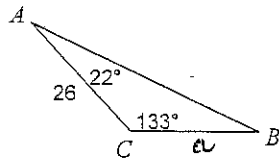
1. Find b .



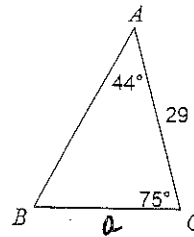
1. Find c .



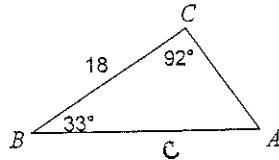
2. Find a .



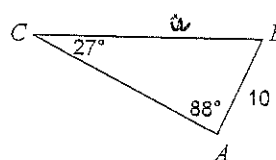
2. Find a .



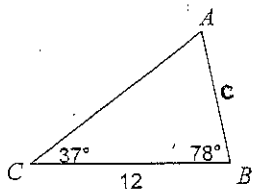
3. Find c .



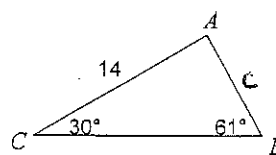
3. Find a .



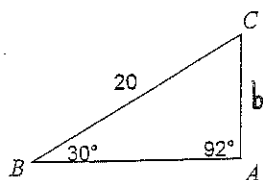
4. Find c .



4. Find c .



5. Find b .



5. Find c .

